

ST FRANCIS XAVIER SCHOOL

SESSION 2022 - 2023

ENGLISH WORKSHEET

CLASS II SEC \_\_\_\_\_

NAME \_\_\_\_\_ DATE \_\_\_\_\_ ROLL NO \_\_\_\_\_

**A. Fill in the blanks with the correct prepositions :**

1. I will go to watch the movie \_\_\_\_\_ 5 in the evening.
2. He put the books \_\_\_\_\_ the table.
3. There is something \_\_\_\_\_ the curtains.
4. He lives \_\_\_\_\_ a small town.
5. Let's meet \_\_\_\_\_ 9 o'clock.
6. Shelly sat \_\_\_\_\_ her parents and watched the movie.
7. My birthday is \_\_\_\_\_ Saturday.
8. I had lunch \_\_\_\_\_ the afternoon.
9. I saw many butterflies \_\_\_\_\_ the garden.
10. I am \_\_\_\_\_ the taxi stand.

**B. Form adverb by adding -ly to the following words.**

1. sad \_\_\_\_\_
2. quick \_\_\_\_\_
3. beautiful \_\_\_\_\_
4. happy \_\_\_\_\_
5. easy \_\_\_\_\_

**C. Fill in the blanks with the appropriate adverbs :-**

1. The baby slept \_\_\_\_\_ all night.
2. I ate my dinner \_\_\_\_\_ as I was in a hurry.
3. The sun shines \_\_\_\_\_.
4. The alarm clock rang \_\_\_\_\_.
5. Danny rode his bicycle \_\_\_\_\_ to school.

**D. Write 10 sentences about the picture given below. You may use the words from the help box:-**

Swing , slide , children , play , park , benches , see-saw ,  
Happy





**MATHEMATICS WORKSHEET**

**CLASS- II SEC-\_\_\_\_\_**

**NAME \_\_\_\_\_ ROLL NO \_\_\_\_\_ DATE \_\_\_\_\_**

**A. Add and subtract the following numbers:-**

**(a)  $500 + 650$**

**(b)  $890 - 499$**

**(c)  $289 + 497$**

**(d)  $956 - 198$**

**B. Multiply**

1) H T O

1 7 8

x 5

2) H T O

0 8 9

x 8

3) H T O

3 6 8

x 3

4) H T O

2 4 8

x 4

**C. Divide**

(a)  $54 \div 9 =$  \_\_\_\_\_

(b)  $72 \div 8 =$  \_\_\_\_\_

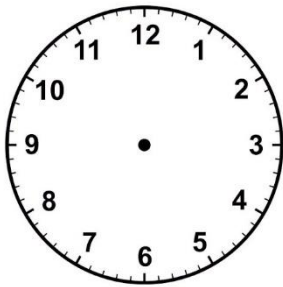
(c)  $42 \div 6 =$  \_\_\_\_\_

(d)  $16 \div 4 =$  \_\_\_\_\_

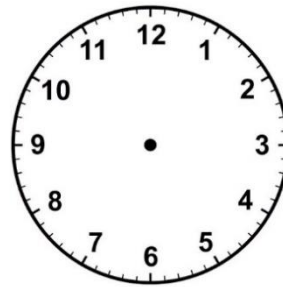
(e)  $108 \div 9 =$  \_\_\_\_\_

(f)  $40 \div 5 =$  \_\_\_\_\_

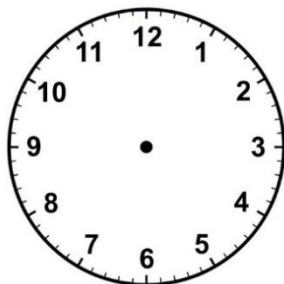
**F. Draw the minute and hour hands on the faces of these clocks :**



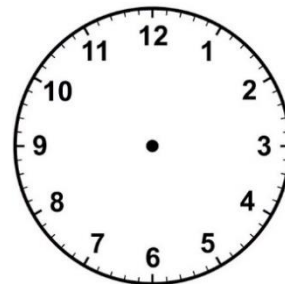
(a) 9 o' clock



(b) 2 o' clock



(c) 5 o' clock

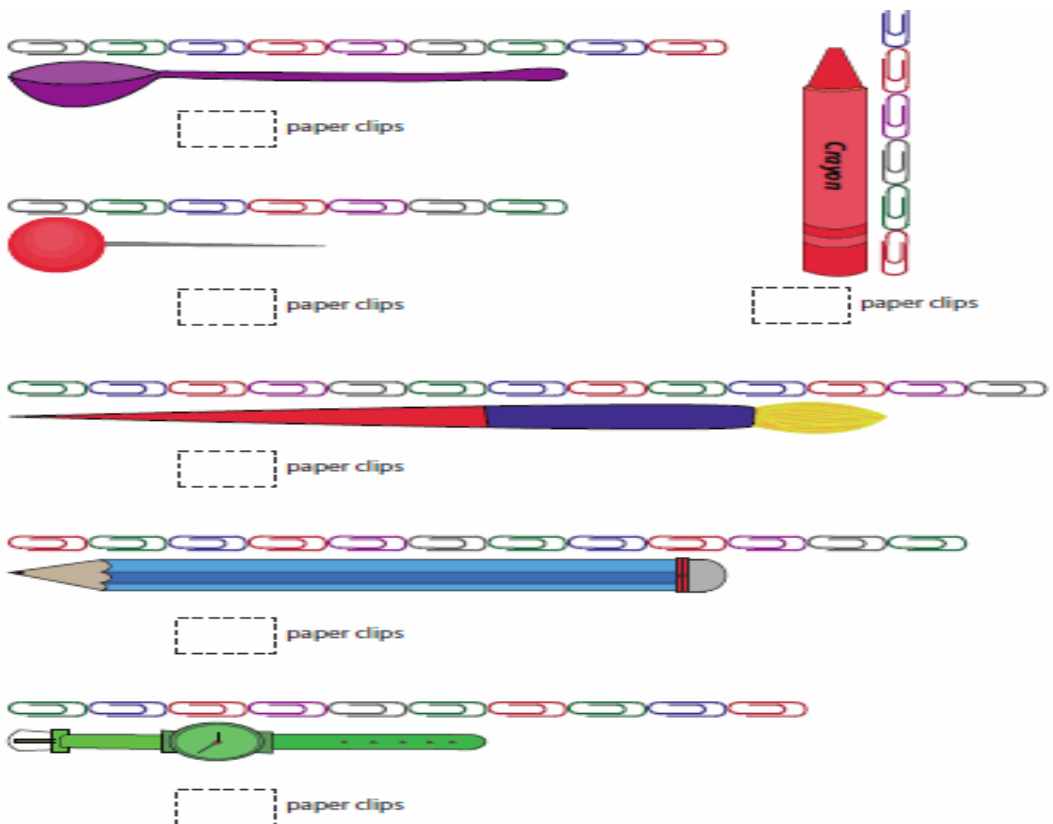


(d) 7 o' clock

**H. Fill in the blanks:**

- 1) A leap year has \_\_\_\_\_ days.
- 2) \_\_\_\_\_ is the first month of the year.
- 3) There are \_\_\_\_\_ months in a year.
- 4) \_\_\_\_\_ and \_\_\_\_\_ comes before Friday.
- 5) \_\_\_\_\_ comes between March and May.
- 6) \_\_\_\_\_ and \_\_\_\_\_ are weekends.
- 7) There are \_\_\_\_\_ days in a week.
- 8) February comes after \_\_\_\_\_.
- 9) Wednesday comes before \_\_\_\_\_.
- 10) \_\_\_\_\_ is the third month of the year.

**D. Measure each objects using paper clips:-**



# E.V.S WORKSHEET

CLASS- II SEC-\_\_\_\_\_

NAME-\_\_\_\_\_ ROLL NO \_\_\_\_\_ DATE \_\_\_\_\_

**A. Answer the following questions:-**

**Q1. What is communication?**

Ans. - \_\_\_\_\_

\_\_\_\_\_

**Q2. What are the three types of communication?**

Ans.- \_\_\_\_\_

\_\_\_\_\_

**Q3.- Write 'P' for Postal communication, 'T' for Telecommunication and 'M' for Mass communication.**

1. Newspaper .....

2. Post card .....

3. Computer .....

4. Radio .....

5. Letter .....


6. Magazine .....

**Q 4. Which of the following is the least expensive means of transport?**

A)



B)



C)



D)



B.) Name the following:-

i) Three means of transport, used within the city :

a) ..... b) ..... c) .....

ii) Two means of transport, used in villages.

a) ..... b) .....

iii) Three means of transport, used for going to other cities :

a) ..... b) ..... c) .....

iv) Two means of transport, for going to other countries :

a) ..... b) .....

v) Three means of transport, used for carrying goods :

a) ..... b) ..... c) .....

C ) Write the means of communication you will use when :

1. You want to discuss something with your classmate.

.....

2. You want to wish Happy Birthday to your cousin in another city.


.....

3. You want to send your latest pictures of a picnic to your friend.


.....




D) Draw, label and colour:-




1. Water transport



2. Land transport





2. Telephone



3. Newspaper

COMPUTER WORKSHEET  
CLASS II

NAME \_\_\_\_\_ ROLL NO \_\_\_\_\_ SEC: \_\_\_\_\_

1. Steps to open MS Paint are ...
  - a. Start Button → All Programs → Paint → Accessories
  - b. Start Button → Accessories → Paint → All Programs
  - c. Start Button → All Programs → Accessories → Paint
2. The part of Paint window that display the name of the file and software is ...
  - a. Title Bar
  - b. Menu Bar
  - c. Ribbon
3. The part of Paint window that used to used to access the tools quickly is ...
  - a. Ribbon
  - b. Quick access toolbar
  - c. Title bar
4. The tool that used for filling a selected color in any closed shapes is ...
  - a. Shape color
  - b. Color palette
  - c. Fill with color tool
5. What is the name of tool below ...
  - a. Color palette
  - b. Rectangle tool
  - c. Fill with color tool
6. The tool that used to draw *square* is ...
  - a. Oval tool
  - b. Text tool
  - c. Rectangle tool
7. The tools that used to draw *circle* and *Oval* in MS Paint is ...
  - a. Text tool
  - b. Color picker tool
  - c. Oval tool
8. The tool that used to draw freehand is .  
..
  - a. Line tool
  - b. Pencil tool
  - c. Oval tool
9. The tool that used to draw *stright line* or *slant line* is ...
  - a. Line tool
  - b. Text tool
  - c. Curve tool
10. The Paint tools that is used for inserting text in picture is ...
  - a. Oval tool
  - b. Text tool
  - c. Magnifier tool
11. The notice that a dotted rectangle in drawing area to insert text is called ...
  - a. Text box
  - b. Text tool
  - c. Text toolbar

Parent's signature- \_\_\_\_\_

Teacher's signature- \_\_\_\_\_

